



UNIVERSITY OF CAMBRIDGE INTERNATIONAL EXAMINATIONS
General Certificate of Education Ordinary Level

CHEMISTRY

5070/11

Paper 1 Multiple Choice

May/June 2012

1 hour

Additional Materials: Multiple Choice Answer Sheet
 Soft clean eraser
 Soft pencil (type B or HB is recommended)



READ THESE INSTRUCTIONS FIRST

Write in soft pencil.

Do not use staples, paper clips, highlighters, glue or correction fluid.

Write your name, Centre number and candidate number on the Answer Sheet in the spaces provided unless this has been done for you.

There are **forty** questions on this paper. Answer **all** questions. For each question there are four possible answers **A, B, C** and **D**.

Choose the **one** you consider correct and record your choice in **soft pencil** on the separate Answer Sheet.

Read the instructions on the Answer Sheet very carefully.

Each correct answer will score one mark. A mark will not be deducted for a wrong answer.

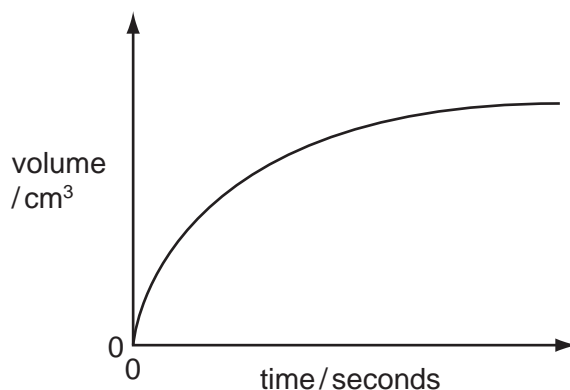
Any rough working should be done in this booklet.

A copy of the Periodic Table is printed on page 16.

This document consists of **14** printed pages and **2** blank pages.

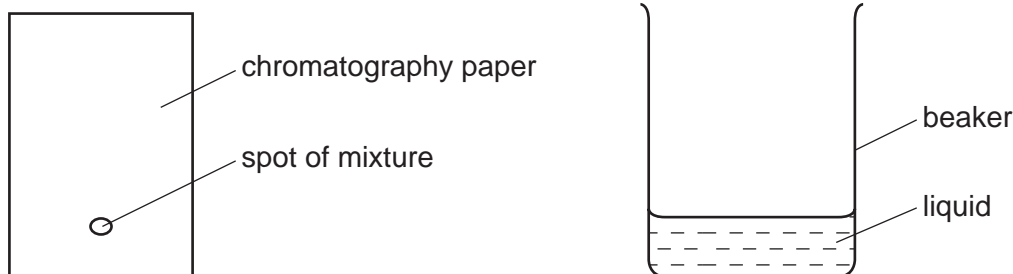


- 1 A student measured the rate of reaction between calcium carbonate and dilute hydrochloric acid. A graph showing the volume of gas produced against time is shown.



Which apparatus was used to measure the variables shown on the graph?

- A balance and gas syringe
 - B burette and pipette
 - C gas syringe and stop watch
 - D pipette and stop watch
- 2 A mixture of two substances is spotted onto a piece of chromatography paper. The paper is inserted into a beaker containing a liquid.



For separation of the substances to occur the spot of mixture must

- A be placed so that the spot is just below the level of the liquid.
 - B be soluble in the liquid.
 - C contain substances of the same R_f values.
 - D contain substances that are coloured.
- 3 Which molecule contains a total of three covalent bonds?
- A C_2H_4
 - B H_2
 - C H_2O
 - D N_2

- 4 The addition of dilute acid to a solution containing the anion Q and the subsequent use of limewater can be used to identify the anion Q.

What is Q?

- A** a carbonate
B a chloride
C an iodide
D a sulfate

- 5 Four substances have the following electrical properties.

substance	property
W	does not conduct under any conditions
X	conducts only in aqueous solution
Y	conducts in both the molten and solid states
Z	conducts in both the molten and aqueous states

What are these four substances?

	W	X	Y	Z
A	HCl	S	NaCl	Pb
B	Pb	HCl	NaCl	S
C	S	HCl	Pb	NaCl
D	S	NaCl	HCl	Pb

- 6 The proton number of element X is 6. The proton number of element Y is 9.

What is the formula of a compound of these elements?

- A** X_2Y_3 **B** X_3Y_2 **C** XY_3 **D** XY_4

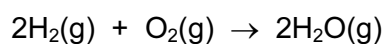
- 7 Which ion reacts with aqueous ammonia to give a precipitate that dissolves in an excess of ammonia?

- A** $Al^{3+}(aq)$ **B** $Fe^{2+}(aq)$ **C** $Fe^{3+}(aq)$ **D** $Zn^{2+}(aq)$

- 8 Which statement about aqueous sodium chloride is correct?
- A It contains sodium atoms.
 - B It contains two different types of molecules.
 - C It does not conduct electricity.
 - D It forms a white precipitate when added to aqueous silver nitrate.
- 9 15.0 cm^3 of 1.0 mol/dm^3 potassium hydroxide just neutralise 20.0 cm^3 of a solution of nitric acid.

What is the concentration of the acid?

- A 0.75 mol/dm^3
 - B 1.0 mol/dm^3
 - C 1.5 mol/dm^3
 - D 7.5 mol/dm^3
- 10 An atom, X, contains 16 protons.
- Which statement about X is correct?
- A It cannot form an ion.
 - B It contains 6 electrons in the outer shell.
 - C It contains 6 neutrons.
 - D It has relative atomic mass of 16.
- 11 The equation for the burning of hydrogen in oxygen is shown.

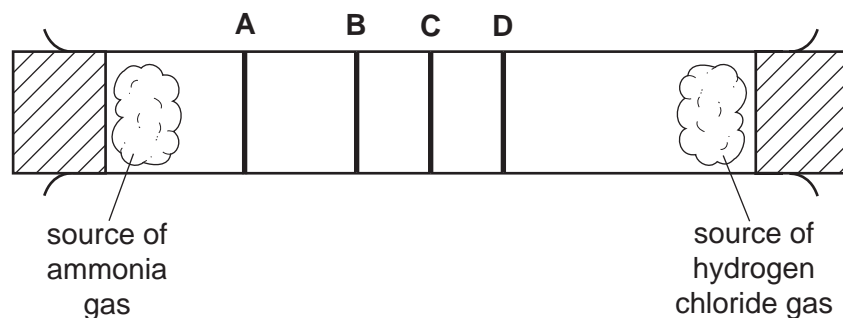


What does this equation indicate?

- A 2 atoms of hydrogen combine with 2 atoms of oxygen.
- B 2 g of hydrogen combine with 1 g of oxygen.
- C 2 moles of steam can be obtained from 0.5 mole of oxygen.
- D 2 moles of steam can be obtained from 1 mole of oxygen.

12 The diagram shows an apparatus used to compare rates of diffusion.

At which labelled position did a white deposit of ammonium chloride form?



13 Which statement about conduction of electricity is correct?

- A Electricity is conducted in aqueous solution by electrons.
- B Electricity is conducted in a metal wire by ions.
- C Electricity is conducted in a molten electrolyte by electrons.
- D Electricity is conducted in an acid solution by ions.

14 In terms of electrons, what happens when potassium combines with iodine to form a compound?


- A The atoms of both elements each lose one electron.
- B The atoms of both elements each gain one electron.
- C The potassium atoms each lose one electron and the iodine atoms each gain one electron.
- D The potassium atoms each gain one electron and the iodine atoms each lose one electron.

15 Aqueous copper(II) sulfate is electrolysed using copper electrodes.

Which equation represents the reaction taking place at the anode (positive electrode) in this electrolysis?

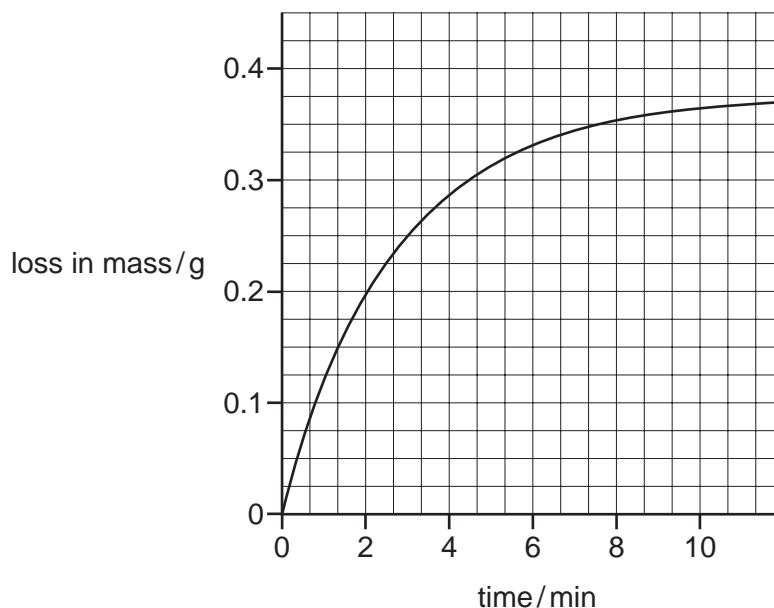
- A $\text{Cu(s)} \rightarrow \text{Cu}^{2+}(\text{aq}) + 2\text{e}^{-}$
- B $\text{SO}_4^{2-}(\text{aq}) \rightarrow \text{SO}_2(\text{g}) + \text{O}_2(\text{g}) + 2\text{e}^{-}$
- C $\text{Cu}^{2+}(\text{aq}) + 2\text{e}^{-} \rightarrow \text{Cu(s)}$
- D $4\text{OH}^{-}(\text{aq}) \rightarrow 2\text{H}_2\text{O(l)} + \text{O}_2(\text{g}) + 4\text{e}^{-}$

- 16 The combustion of methane is exothermic. The equation is given below.



What can be deduced from the fact that the reaction is exothermic?

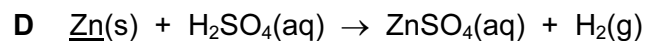
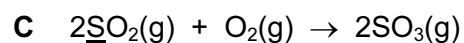
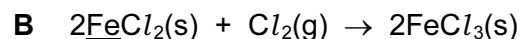
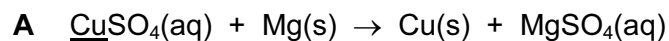
- A** Fewer bonds are broken than are made.
B Less energy is involved in breaking bonds than is involved in making bonds.
C More bonds are broken than are made.
D More energy is involved in breaking bonds than is involved in making bonds.
- 17 How does a catalyst increase the speed of a reaction?
- A** by increasing the collision frequency of particles
B by increasing the speed of the particles
C by increasing the temperature of the reaction
D by lowering the activation energy
- 18 Copper(II) carbonate powder was heated. The loss in mass was plotted against time as shown on the graph.



During which time interval is the reaction fastest?

- A** 0 to 2 min **B** 2 to 4 min **C** 6 to 8 min **D** 8 to 10 min

19 In which equation is the underlined element reduced?



20 A sample of air was bubbled into water. The pH of the water slowly changed from 7 to 6.

Which gas in the sample caused this change?

A carbon dioxide

B carbon monoxide

C nitrogen

D oxygen

21 Which compound is insoluble in water?

A lead sulfate

B silver nitrate

C sodium carbonate

D zinc chloride

22 The following statements about dilute sulfuric acid are **all** correct.

1 Addition of Universal Indicator shows that the solution has a pH value of less than 7.0.

2 A white precipitate is formed when aqueous barium nitrate is added.

3 The solution reacts with copper(II) oxide, forming a blue solution.

4 The solution turns anhydrous copper(II) sulfate from white to blue.

Which two statements confirm the acidic nature of the solution?

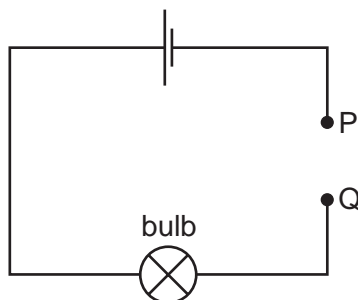
A 1 and 2

B 1 and 3

C 2 and 4

D 3 and 4

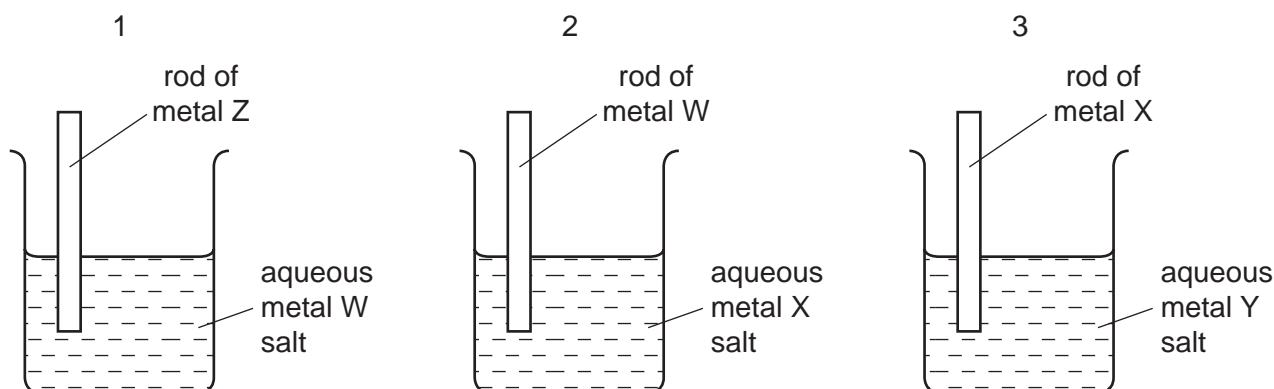
- 23 Pieces of material are placed in turn between P and Q in the incomplete electrical circuit shown.



Which material would **not** cause the bulb to light?

- A aluminium
 - B diamond
 - C magnesium
 - D zinc
- 24 Which of the following pairs of compounds react together to produce ammonia?
1. ammonium nitrate and calcium carbonate
 2. ammonium nitrate and calcium oxide
 3. ammonium sulfate and calcium hydroxide
 4. ammonium sulfate and calcium nitrate
- A 1 and 2 only
 - B 1 and 4 only
 - C 2 and 3 only
 - D 3 and 4 only
- 25 Which reaction occurring in the blast furnace is an acid base reaction?
- A $C + CO_2 \rightarrow 2CO$
 - B $C + O_2 \rightarrow CO_2$
 - C $CaO + SiO_2 \rightarrow CaSiO_3$
 - D $Fe_2O_3 + 3CO \rightarrow 2Fe + 3CO_2$

30 Three different beakers are set up as shown.



In beaker 1 metal W is displaced from solution.

In beaker 2 metal X is displaced from solution.

In beaker 3 metal Y is displaced from solution.

What is the order of **decreasing** reactivity of the four metals?

	most reactive	→			least reactive
A	W	X	Y	Z	
B	X	Y	W	Z	
C	Z	W	X	Y	
D	Z	X	W	Y	

31 Which gases are formed during the production of aluminium by electrolysis of molten aluminium oxide?

- A** carbon dioxide, carbon monoxide, oxygen
- B** carbon dioxide, carbon monoxide, sulfur dioxide
- C** carbon dioxide, oxygen, sulfur dioxide
- D** carbon monoxide, oxygen, sulfur dioxide

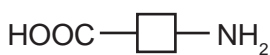
32 Which pair of gases could be removed from the atmosphere using calcium carbonate?

- A** CO₂ and O₃
- B** CO and SO₂
- C** CH₄ and NO₂
- D** NO₂ and SO₂

33 In which parts of a motor car do the reactions, shown in the equations, take place?

	$\text{N}_2 + \text{O}_2 \rightarrow 2\text{NO}$	$2\text{CO} + 2\text{NO} \rightarrow 2\text{CO}_2 + \text{N}_2$
A	engine	engine
B	engine	exhaust
C	exhaust	engine
D	exhaust	exhaust

34 The diagrams show four monomers.



How many of these monomers would react with the molecule below to form a polymer?



A 1

B 2

C 3

D 4

35 For which molecules are the empirical and molecular formulae the same?

1. methanoic acid, HCO_2H
2. ethanoic acid, $\text{CH}_3\text{CO}_2\text{H}$
3. propanoic acid, $\text{C}_2\text{H}_5\text{CO}_2\text{H}$
4. butanoic acid, $\text{C}_3\text{H}_7\text{CO}_2\text{H}$

A 1, 2 and 3 only

B 1 and 3 only

C 2 and 3 only

D 2, 3 and 4 only

36 A compound Y is thought to be an organic acid.

Which reaction shows that Y is an **organic** acid?

A It reacts with an alcohol to form an ester.

B It reacts with magnesium to form hydrogen.

C It reacts with sodium carbonate to form carbon dioxide.

D It turns litmus red.

- 37 A 10 cm³ sample of a gaseous hydrocarbon is completely burnt in oxygen. The total volume of the products is 70 cm³. All gas volumes are measured at room temperature and pressure.

Which equation represents the combustion of the hydrocarbon?

- A $\text{CH}_4(\text{g}) + 2\text{O}_2(\text{g}) \rightarrow \text{CO}_2(\text{g}) + 2\text{H}_2\text{O}(\text{g})$
- B $\text{C}_2\text{H}_4(\text{g}) + 3\text{O}_2(\text{g}) \rightarrow 2\text{CO}_2(\text{g}) + 2\text{H}_2\text{O}(\text{g})$
- C $\text{C}_3\text{H}_8(\text{g}) + 5\text{O}_2(\text{g}) \rightarrow 3\text{CO}_2(\text{g}) + 4\text{H}_2\text{O}(\text{g})$
- D $2\text{C}_2\text{H}_6(\text{g}) + 7\text{O}_2(\text{g}) \rightarrow 4\text{CO}_2(\text{g}) + 6\text{H}_2\text{O}(\text{g})$

- 38 The boiling points of the alcohols increase as their relative molecular mass increases.

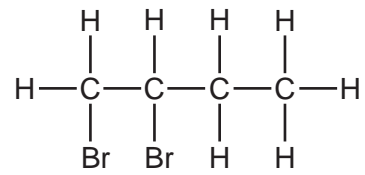
Which alcohol has the highest boiling point?

- A butanol
- B ethanol
- C methanol
- D propanol

- 39 Which of the following is a type of naturally occurring polymer?

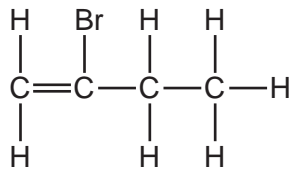
- A paraffin
- B polyethene
- C protein
- D sugar

40 Compound Q reacts with bromine to form the compound shown.

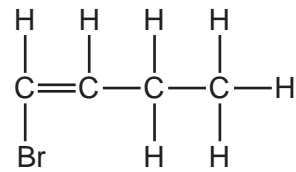


Which is compound Q?

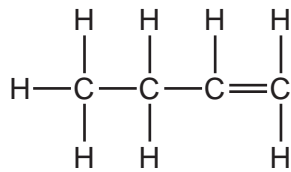
A



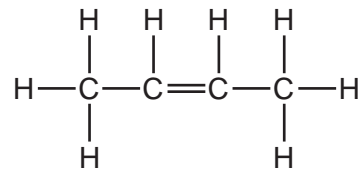
B



C



D



DATA SHEET
The Periodic Table of the Elements

		Group											
I	II	III	IV	V	VI	VII	O					O	
		1 H Hydrogen 1											4 He Helium 2
7 Li Lithium 3	9 Be Beryllium 4											20 Ne Neon 10	
23 Na Sodium 11	24 Mg Magnesium 12	11 B Boron 5	12 C Carbon 6	14 N Nitrogen 7	16 O Oxygen 8	19 F Fluorine 9					35.5 Cl Chlorine 17		
39 K Potassium 19	40 Ca Calcium 20	27 Al Aluminium 13	28 Si Silicon 14	31 P Phosphorus 15	32 S Sulfur 16	79 Se Selenium 34					84 Kr Krypton 36		
85 Rb Rubidium 37	88 Sr Strontium 38	70 Ga Gallium 31	73 Ge Germanium 32	75 As Arsenic 33	79 Se Selenium 34	127 I Iodine 53					131 Xe Xenon 54		
133 Cs Caesium 55	137 Ba Barium 56	65 Zn Zinc 30	64 Cu Copper 29	106 Pd Palladium 46	112 Cd Cadmium 48	204 Pb Lead 82					209 Bi Bismuth 83		
226 Fr Francium 87	226 Ra Radium 88	59 Ni Nickel 28	59 Co Cobalt 27	103 Rh Rhodium 45	192 Ir Iridium 77	201 Hg Mercury 80					85 At Astatine 85		
		56 Fe Iron 26	55 Mn Manganese 25	101 Ru Ruthenium 44	186 Re Rhenium 75	195 Pt Platinum 78					84 Po Polonium 84		
		48 Ti Titanium 22	51 V Vanadium 23	91 Zr Zirconium 40	181 Ta Tantalum 73	197 Au Gold 79					86 Rn Radon 86		
		45 Sc Scandium 21	48 Ti Titanium 22	96 Mo Molybdenum 42	184 W Tungsten 74					207 Pb Lead 82			
		89 Y Yttrium 39	93 Nb Niobium 41	101 Ru Ruthenium 44	186 Re Rhenium 75					209 Bi Bismuth 83			
		139 La Lanthanum 57	181 Ta Tantalum 73	190 Os Osmium 76	201 Hg Mercury 80					209 Bi Bismuth 83			
		226 Ra Radium 88	227 Ac Actinium 89									209 Bi Bismuth 83	
												167 Er Erbium 68	
												169 Tm Thulium 69	
												173 Yb Ytterbium 70	
												175 Lu Lutetium 71	
												100 Fm Fermium 100	
												101 Md Mendelevium 101	
												102 No Nobelium 102	
												99 Es Einsteinium 99	
												98 Cf Californium 98	
												97 Bk Berkelium 97	
												96 Cm Curium 96	
												95 Am Americium 95	
												63 Eu Europium 63	
												64 Gd Gadolinium 64	
												65 Tb Terbium 65	
												66 Dy Dysprosium 66	
												67 Ho Holmium 67	
												68 Er Erbium 68	
												69 Tm Thulium 69	
												70 Yb Ytterbium 70	
												71 Lu Lutetium 71	
												98 Cf Californium 98	
												99 Es Einsteinium 99	
												100 Fm Fermium 100	
												101 Md Mendelevium 101	
												102 No Nobelium 102	
												103 Lr Lawrencium 103	

*58-71 Lanthanoid series
†90-103 Actinoid series

a	X	a = relative atomic mass
b	X	b = proton (atomic) number

Key

The volume of one mole of any gas is 24 dm³ at room temperature and pressure (r.t.p.).

Permission to reproduce items where third party owned material protected by copyright is included has been sought and cleared where possible. Every reasonable effort has been made by the publisher (UCLES) to trace copyright holders, but if any items requiring clearance have unwittingly been included, the publisher will be pleased to make amends at the earliest possible opportunity.

University of Cambridge International Examinations is part of the Cambridge Assessment Group. Cambridge Assessment is the brand name of University of Cambridge Local Examinations Syndicate (UCLES), which is itself a department of the University of Cambridge.