



UNIVERSITY OF CAMBRIDGE INTERNATIONAL EXAMINATIONS  
General Certificate of Education Ordinary Level

**CHEMISTRY**

**5070/11**

Paper 1 Multiple Choice

**May/June 2013**

**1 hour**

Additional Materials: Multiple Choice Answer Sheet  
Soft clean eraser  
Soft pencil (type B or HB is recommended)



**READ THESE INSTRUCTIONS FIRST**

Write in soft pencil.

Do not use staples, paper clips, highlighters, glue or correction fluid.

Write your name, Centre number and candidate number on the Answer Sheet in the spaces provided unless this has been done for you.

**DO NOT WRITE IN ANY BARCODES.**

There are **forty** questions on this paper. Answer **all** questions. For each question there are four possible answers **A, B, C** and **D**.

Choose the **one** you consider correct and record your choice in **soft pencil** on the separate Answer Sheet.

**Read the instructions on the Answer Sheet very carefully.**

Each correct answer will score one mark. A mark will not be deducted for a wrong answer.

Any rough working should be done in this booklet.

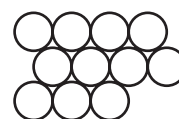
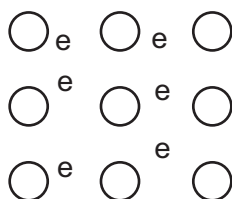
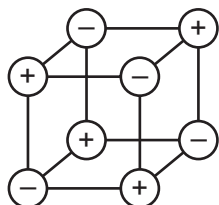
A copy of the Periodic Table is printed on page 16.

Electronic calculators may be used.

This document consists of **13** printed pages and **3** blank pages.



- 1 In which method of separation are  $R_f$  values used?
- A chromatography  
B crystallisation  
C filtration  
D fractional distillation
- 2 The diagrams show the arrangement of particles in three **solids**: krypton, potassium and sodium chloride.



In which order are the solids shown?

- A krypton; potassium; sodium chloride  
B krypton; sodium chloride; potassium  
C sodium chloride; krypton; potassium  
D sodium chloride; potassium; krypton
- 3 In which pair do neither of the gases change the colour of damp blue litmus paper?
- A ammonia and hydrogen  
B ammonia and hydrogen chloride  
C carbon dioxide and chlorine  
D carbon dioxide and sulfur dioxide
- 4 Naturally-occurring bromine has a relative atomic mass of 80 and consists entirely of two isotopes of relative atomic masses 79 and 81.
- What can be deduced about naturally-occurring bromine from this information only?
- A Bromine contains the two isotopes in equal proportions.  
B Bromine has different oxidation states.  
C Bromine isotopes have different numbers of protons.  
D Bromine is radioactive.
- 5 Which compound has molecules each of which contains only two covalent bonds?
- A  $\text{CH}_4$                       B  $\text{H}_2\text{O}$                       C  $\text{MgCl}_2$                       D  $\text{Na}_2\text{O}$

- 6 What can be deduced about two gases that have the same relative molecular mass?
- A They have the same boiling point.
  - B They have the same number of atoms in one molecule.
  - C They have the same rate of diffusion at room temperature and pressure.
  - D They have the same solubility in water at room temperature.
- 7 An ionic bond is formed by
- A electron sharing between metals and non-metals.
  - B electron sharing between non-metals.
  - C electron transfer between non-metals.
  - D electron transfer from metals to non-metals.
- 8 Both magnesium oxide, MgO, and aluminium oxide,  $Al_2O_3$ , are solids at room temperature, 25 °C.
- MgO has a melting point of 2852 °C and a boiling point of 3600 °C.
- $Al_2O_3$  has a melting point of 2072 °C and a boiling point of 2880 °C.
- Over which temperature range will both pure compounds conduct electricity?
- A 25 to 2852 °C
  - B 2072 to 2852 °C
  - C 2852 to 2880 °C
  - D 2880 to 3600 °C
- 9 Which substance conducts an electric current but remains chemically unchanged?
- A aluminium
  - B aqueous sodium chloride
  - C molten lead(II) bromide
  - D pure ethanoic acid
- 10 Which statement most clearly indicates that diamond and graphite are forms of carbon?
- A Both are crystalline solids.
  - B Complete combustion of equal masses of both solids produces equal masses of carbon dioxide as the only product.
  - C Graphite conducts electricity whereas diamond is an insulator.
  - D Under suitable conditions graphite can be partially converted into diamond.

- 11 In an experiment,  $1\text{ cm}^3$  of a gaseous hydrocarbon **X** required  $4\text{ cm}^3$  of oxygen for complete combustion to give  $3\text{ cm}^3$  of carbon dioxide. All gas volumes are measured at r.t.p.

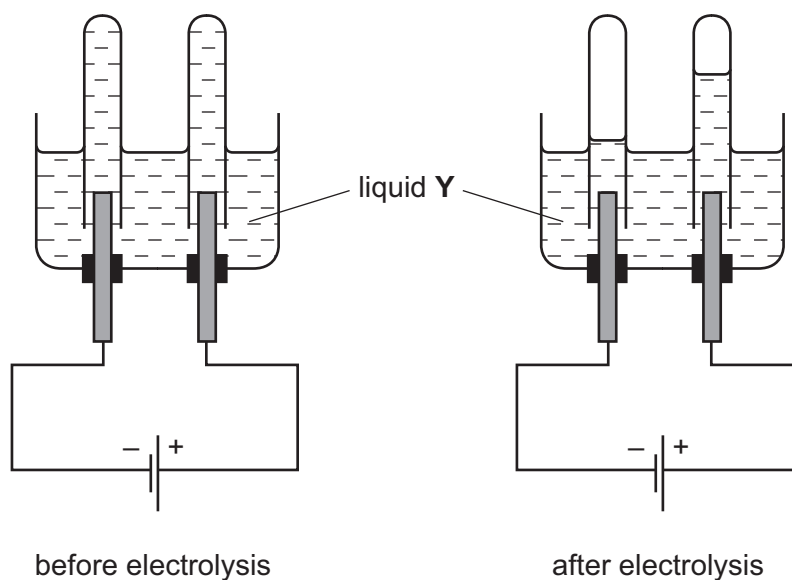
Which formula represents **X**?

- A**  $\text{C}_2\text{H}_2$       **B**  $\text{C}_2\text{H}_4$       **C**  $\text{C}_3\text{H}_4$       **D**  $\text{C}_3\text{H}_8$

- 12 What is the concentration of a solution containing  $1.0\text{ g}$  of sodium hydroxide in  $250\text{ cm}^3$  of solution?

- A**  $0.025\text{ mol/dm}^3$   
**B**  $0.10\text{ mol/dm}^3$   
**C**  $0.25\text{ mol/dm}^3$   
**D**  $1.0\text{ mol/dm}^3$

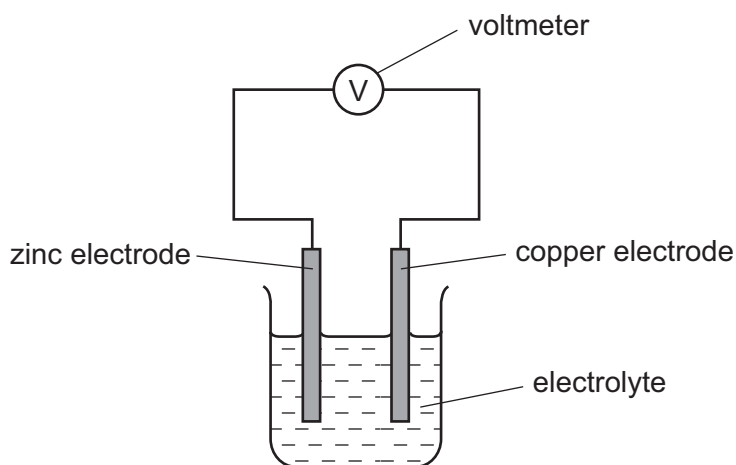
- 13 The diagrams show an electrolysis experiment using inert electrodes.



Which could be liquid **Y**?

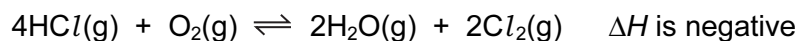
- A** aqueous copper(II) sulfate  
**B** concentrated aqueous sodium chloride  
**C** dilute sulfuric acid  
**D** ethanol

- 14 Which substance, when added to water, does **not** make a solution that is a good conductor of electricity?
- A barium nitrate
  - B calcium chloride
  - C lead(II) nitrate
  - D zinc carbonate
- 15 A simple cell is shown below.



- Which statement about the process occurring when the cell is in operation is correct?
- A  $\text{Cu}^{2+}$  ions are formed in solution.
  - B Electrons travel through the solution.
  - C The reaction  $\text{Zn} \rightarrow \text{Zn}^{2+} + 2\text{e}^-$  occurs.
  - D Zinc increases in mass.
- 16 The usual conditions for the Haber process are 250 atm pressure, 450 °C and an iron catalyst.
- Which change in conditions would give the reactants more energy?
- A addition of more catalyst
  - B a decrease in pressure
  - C an increase in concentration of the reactants
  - D an increase in temperature

17 Chlorine can be manufactured by the following reaction.

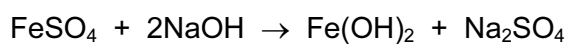
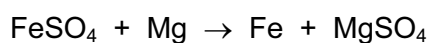
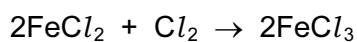
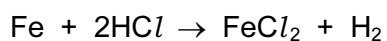


A mixture in dynamic equilibrium is formed.

Which change to the mixture will increase the amount of chlorine at equilibrium?

- A adding a catalyst
- B adding more  $\text{HCl}(\text{g})$
- C decreasing the pressure
- D increasing the temperature

18 Equations for reactions of iron and iron compounds are shown.



How many of these are redox reactions?

- A 1                      B 2                      C 3                      D 4

19 Which is a use of sulfuric acid?

- A as a bleach
- B in the manufacture of ammonia
- C in the manufacture of fertilisers
- D in the manufacture of sulfur trioxide

- 20 The table shows the solubility of some compounds of metal Q in cold water.

salt	solubility in cold water
carbonate	insoluble
chloride	soluble
sulfate	insoluble

What is metal Q?

- A barium
  - B lead
  - C magnesium
  - D sodium
- 21 A metal *M* forms a chloride which dissolves in cold water and has an oxide which dissolves in both strong acids and strong alkalis.

What is *M*?

- A iron
  - B lead
  - C sodium
  - D zinc
- 22 Which element has a variable oxidation state, can act as a catalyst and forms coloured compounds?
- A carbon
  - B iron
  - C lead
  - D nitrogen
- 23 An atom of which element has the same electronic configuration as the strontium ion?
- A calcium
  - B krypton
  - C rubidium
  - D selenium

24 The boiling points of gaseous elements increase as the size of their atoms increases.

Which of these noble gases has the highest boiling point?

- A argon
- B helium
- C krypton
- D neon

25 The sentence describes two metals and their oxides.

Metal X could be copper because its oxide is .....1..... and metal Y could be .....2..... because its oxide is amphoteric.

Which words correctly complete gaps 1 and 2?

	1	2
A	acidic	aluminium
B	basic	aluminium
C	acidic	magnesium
D	basic	magnesium

26 Which gas could be used to convert copper(II) oxide to copper?

- A carbon dioxide
- B hydrogen
- C nitrogen
- D oxygen

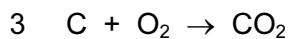

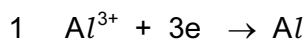
27 Aluminium and copper are often used to make coins but iron is not.

Which statement explains this?

- A Iron is above both aluminium and copper in the reactivity series.
- B Iron is more expensive to manufacture than aluminium or copper.
- C Iron is rarer than both aluminium and copper.
- D Iron reacts with water.



28 In the electrolysis of molten aluminium oxide for the extraction of aluminium, the following three reactions take place.



Which reactions take place at the positive electrode?

- A** 1 only      **B** 2 only      **C** 1 and 3 only      **D** 2 and 3 only

29 Which two substances are removed from the bottom of the blast furnace?

1 coke

2 iron

3 limestone

4 slag

- A** 1 and 3      **B** 1 and 4      **C** 2 and 3      **D** 2 and 4

30 An alloy of copper and zinc is added to an excess of dilute hydrochloric acid. The resulting mixture is then filtered.

Which observations are correct?

	filtrate	residue
<b>A</b>	colourless solution	none
<b>B</b>	colourless solution	red-brown
<b>C</b>	blue solution	grey
<b>D</b>	blue solution	none

31 Which aqueous reagent liberates ammonia from ammonium nitrate on warming?

**A** calcium nitrate

**B** potassium hydroxide

**C** sodium chloride

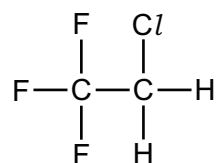
**D** sulfuric acid

32 An aqueous solution of a compound **X** reacts with

- aqueous zinc chloride to form a white precipitate which dissolves when **X** is in excess,
- aluminium sulfate solution to form a white precipitate which is insoluble when **X** is in excess.

What is the identity of **X**?

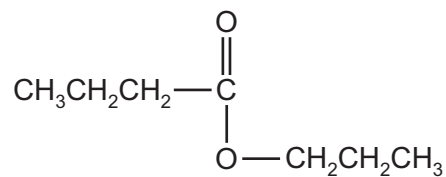
- A** ammonia
- B** barium chloride
- C** silver nitrate
- D** sodium hydroxide
- 33 CFC compounds were commonly used as aerosol propellants. The structure of one CFC compound is shown.



Which element in this compound causes a depletion of ozone in the atmosphere?

- A** carbon
- B** chlorine
- C** fluorine
- D** hydrogen
- 34 Which gas is most likely to react with limestone?
- A** ammonia
- B** carbon monoxide
- C** methane
- D** sulfur dioxide

35 The diagram shows the structure of an ester.



What are the starting materials for making this compound?

- A butanol and butanoic acid
- B butanol and propanoic acid
- C propanol and butanoic acid
- D propanol and propanoic acid

36 Which information is correct regarding the formation of ethanol by the process of fermentation?

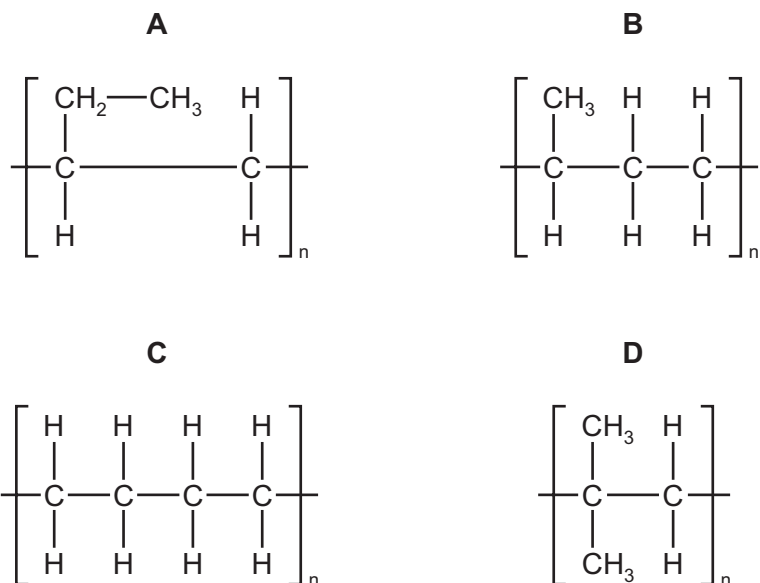
	substances fermented	gas evolved during fermentation
A	carbohydrates	carbon dioxide
B	carbohydrates	carbon monoxide
C	hydrocarbons	carbon dioxide
D	hydrocarbons	carbon monoxide

37 Nylon, poly(ethene) and *Terylene* are macromolecules.

In which of these macromolecules is the C=O group present in the linkage?

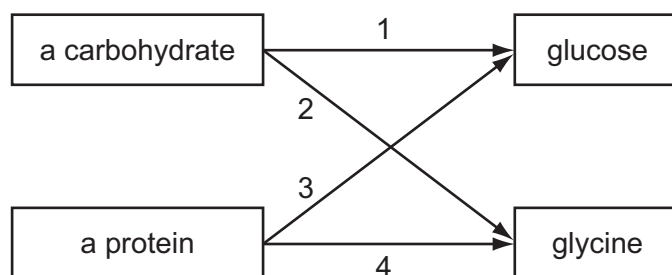
- A nylon and *Terylene* only
- B nylon only
- C poly(ethene) and *Terylene* only
- D *Terylene* only

38 Which partial structure is correct for the product of polymerisation of butene,  $\text{CH}_2=\text{CHCH}_2\text{CH}_3$ ?



39 Glucose is a simple sugar. Glycine is an amino acid.

In the diagram, which two arrows correctly show the hydrolysis products of a carbohydrate and of a protein?



- A** 1 and 3      **B** 1 and 4      **C** 2 and 3      **D** 2 and 4

40 When crude oil is distilled several products are obtained.

What is the correct order of their boiling points?

	highest boiling point <span style="margin-left: 100px;">→</span> lowest boiling point			
<b>A</b>	diesel	paraffin (kerosene)	petrol (gasoline)	lubricating oil
<b>B</b>	lubricating oil	diesel	paraffin (kerosene)	petrol (gasoline)
<b>C</b>	paraffin (kerosene)	petrol (gasoline)	lubricating oil	diesel
<b>D</b>	petrol (gasoline)	paraffin (kerosene)	diesel	lubricating oil







**DATA SHEET**  
**The Periodic Table of the Elements**

		Group																																		
I	II	III	IV	V	VI	VII	0																													
		1 <b>H</b> Hydrogen 1					4 <b>He</b> Helium 2																													
7 <b>Li</b> Lithium 3	9 <b>Be</b> Beryllium 4											20 <b>Ne</b> Neon 10																								
23 <b>Na</b> Sodium 11	24 <b>Mg</b> Magnesium 12	11 <b>B</b> Boron 5	12 <b>C</b> Carbon 6	14 <b>N</b> Nitrogen 7	16 <b>O</b> Oxygen 8	19 <b>F</b> Fluorine 9	40 <b>Ar</b> Argon 18																													
39 <b>K</b> Potassium 19	40 <b>Ca</b> Calcium 20	27 <b>Al</b> Aluminium 13	28 <b>Si</b> Silicon 14	31 <b>P</b> Phosphorus 15	32 <b>S</b> Sulfur 16	35.5 <b>Cl</b> Chlorine 17	84 <b>Kr</b> Krypton 36																													
85 <b>Rb</b> Rubidium 37	88 <b>Sr</b> Strontium 38	70 <b>Ga</b> Gallium 31	73 <b>Ge</b> Germanium 32	75 <b>As</b> Arsenic 33	79 <b>Se</b> Selenium 34	80 <b>Br</b> Bromine 35	131 <b>Xe</b> Xenon 54																													
133 <b>Cs</b> Caesium 55	137 <b>Ba</b> Barium 56	65 <b>Zn</b> Zinc 30	64 <b>Cu</b> Copper 29	59 <b>Ni</b> Nickel 28	106 <b>Pd</b> Palladium 46	108 <b>Ag</b> Silver 47	112 <b>Cd</b> Cadmium 48	115 <b>In</b> Indium 49	119 <b>Sn</b> Tin 50	122 <b>Sb</b> Antimony 51	127 <b>I</b> Iodine 53	209 <b>Po</b> Polonium 84	210 <b>At</b> Astatine 85	86 <b>Rn</b> Radon 86																						
226 <b>Fr</b> Francium 87	226 <b>Ra</b> Radium 88	201 <b>Hg</b> Mercury 80	197 <b>Au</b> Gold 79	195 <b>Pt</b> Platinum 78	192 <b>Ir</b> Iridium 77	190 <b>Os</b> Osmium 76	186 <b>Re</b> Rhenium 75	184 <b>W</b> Tungsten 74	181 <b>Ta</b> Tantalum 73	178 <b>Hf</b> Hafnium 72	173 <b>Yb</b> Ytterbium 70	169 <b>Tm</b> Thulium 69	167 <b>Er</b> Erbium 68	165 <b>Ho</b> Holmium 67	162 <b>Dy</b> Dysprosium 66	159 <b>Tb</b> Terbium 65	157 <b>Gd</b> Gadolinium 64	152 <b>Eu</b> Europium 63	150 <b>Sm</b> Samarium 62	144 <b>Nd</b> Neodymium 60	141 <b>Pr</b> Praseodymium 59	140 <b>Ce</b> Cerium 58	232 <b>Th</b> Thorium 90	238 <b>U</b> Uranium 92	238 <b>Pa</b> Protactinium 91	93 <b>Np</b> Neptunium 93	94 <b>Pu</b> Plutonium 94	95 <b>Am</b> Americium 95	96 <b>Cm</b> Curium 96	97 <b>Bk</b> Berkelium 97	98 <b>Cf</b> Californium 98	99 <b>Es</b> Einsteinium 99	100 <b>Fm</b> Fermium 100	101 <b>Md</b> Mendelevium 101	102 <b>No</b> Nobelium 102	103 <b>Lr</b> Lawrencium 103

\*58-71 Lanthanoid series  
†90-103 Actinoid series

Key

a	<b>X</b>	b
---	----------	---

a = relative atomic mass  
X = atomic symbol  
b = proton (atomic) number

The volume of one mole of any gas is 24 dm<sup>3</sup> at room temperature and pressure (r.t.p.).

Permission to reproduce items where third party owned material protected by copyright is included has been sought and cleared where possible. Every reasonable effort has been made by the publisher (UCLES) to trace copyright holders, but if any items requiring clearance have unwittingly been included, the publisher will be pleased to make amends at the earliest possible opportunity.

University of Cambridge International Examinations is part of the Cambridge Assessment Group. Cambridge Assessment is the brand name of University of Cambridge Local Examinations Syndicate (UCLES), which is itself a department of the University of Cambridge.